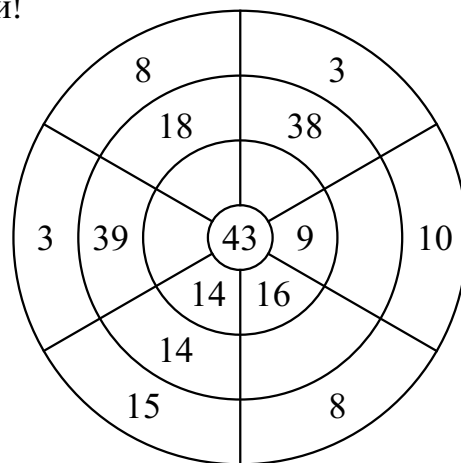
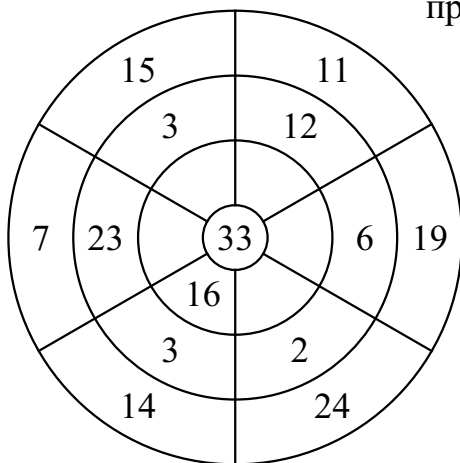


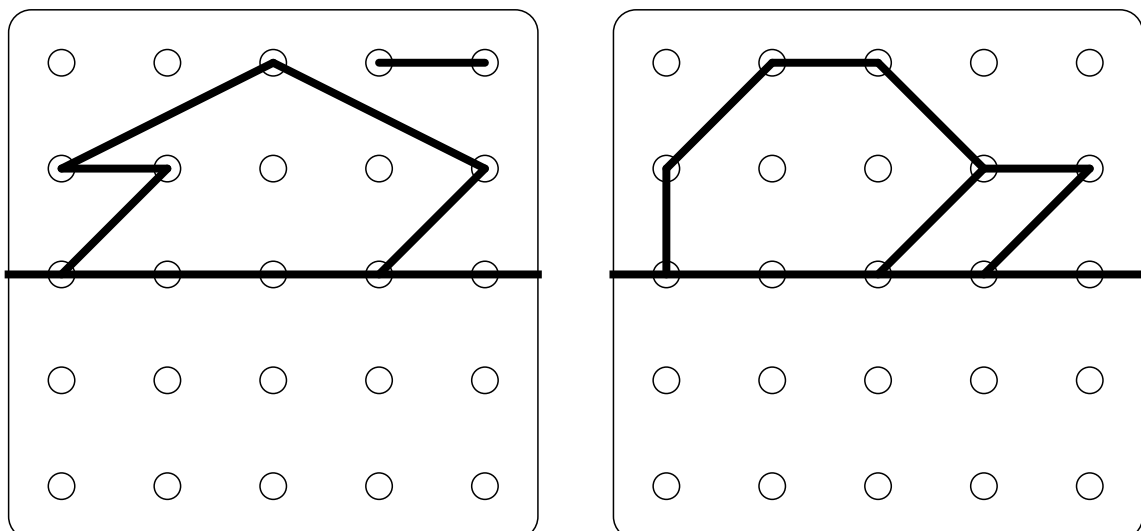
Реши примеры столбиком.

| | | | | | | | | | | | | |
|-------|-----|---|-----|-----|-----|-----|-----|-----|-----|-----|-----|-----|
| | 7 4 | | 1 1 | | 6 8 | | 2 9 | | 1 5 | | 5 9 | |
| + | | 2 | + | 4 4 | + | 2 4 | + | 6 5 | + | 3 4 | + | 1 5 |
| <hr/> | | | | | | | | | | | | |
| | 7 0 | | 2 | | 4 5 | | 2 7 | | 5 6 | | 3 2 | |
| + | | 7 | + | 2 0 | + | 2 3 | + | 6 4 | + | 1 6 | + | 4 2 |
| <hr/> | | | | | | | | | | | | |

Сумма чисел каждого сектора должна быть равна числу в центре круга. Заполни пропуски!



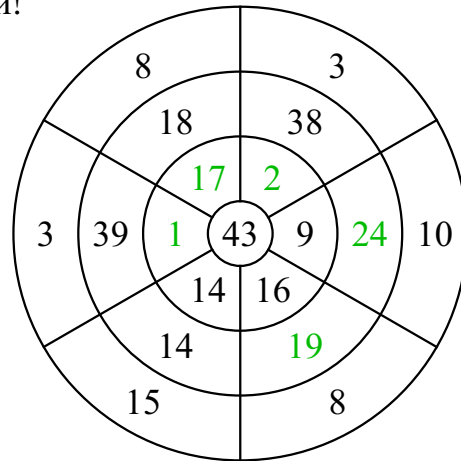
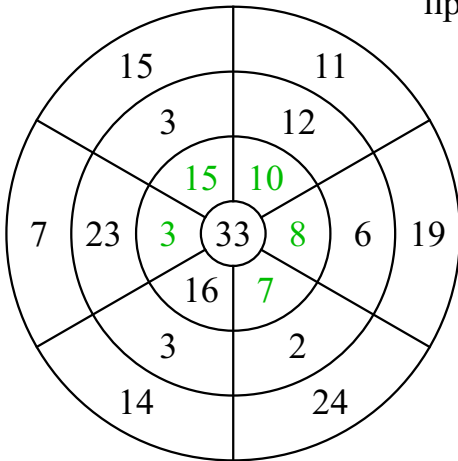
Рисование по точкам. Дорисуй так, как показано на верхней части рисунка.



Реши примеры столбиком.

| | | | | | | | | | | | | | | | | | | | | | | | | |
|--|--|---|---|--|--|---|---|--|--|---|---|--|--|---|---|--|--|---|---|--|--|---|---|--|
| | | | | | | | | | | | | | | | | | | | | | | | | |
| | | 7 | 4 | | | 1 | 1 | | | 6 | 8 | | | 2 | 9 | | | 1 | 5 | | | 5 | 9 | |
| | | + | | | | + | | | | + | | | | + | | | | | + | | | + | | |
| | | | | | | | | | | | | | | | | | | | | | | | | |
| | | | | | | | | | | | | | | | | | | | | | | | | |
| | | | | | | | | | | | | | | | | | | | | | | | | |
| | | | | | | | | | | | | | | | | | | | | | | | | |
| | | | | | | | | | | | | | | | | | | | | | | | | |
| | | | | | | | | | | | | | | | | | | | | | | | | |
| | | | | | | | | | | | | | | | | | | | | | | | | |
| | | | | | | | | | | | | | | | | | | | | | | | | |
| | | | | | | | | | | | | | | | | | | | | | | | | |
| | | | | | | | | | | | | | | | | | | | | | | | | |
| | | | | | | | | | | | | | | | | | | | | | | | | |
| | | | | | | | | | | | | | | | | | | | | | | | | |
| | | | | | | | | | | | | | | | | | | | | | | | | |
| | | | | | | | | | | | | | | | | | | | | | | | | |

Сумма чисел каждого сектора должна быть равна числу в центре круга. Заполни пропуски!



Рисование по точкам. Дорисуй так, как показано на верхней части рисунка.

